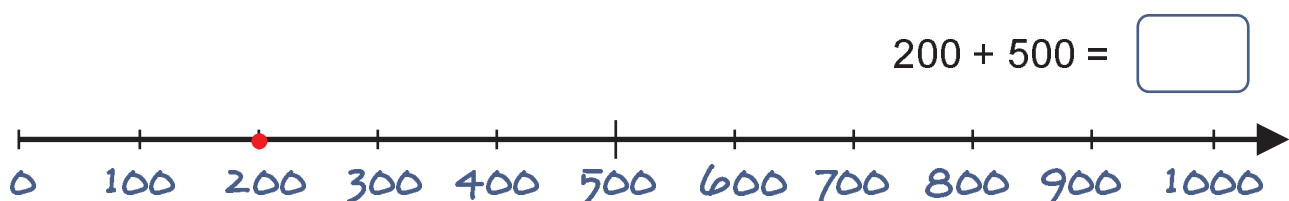
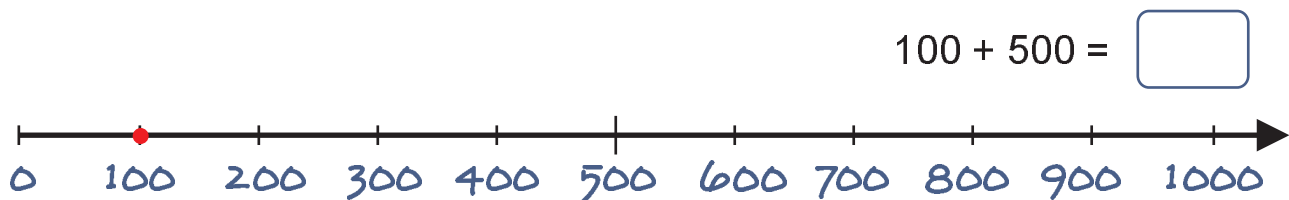
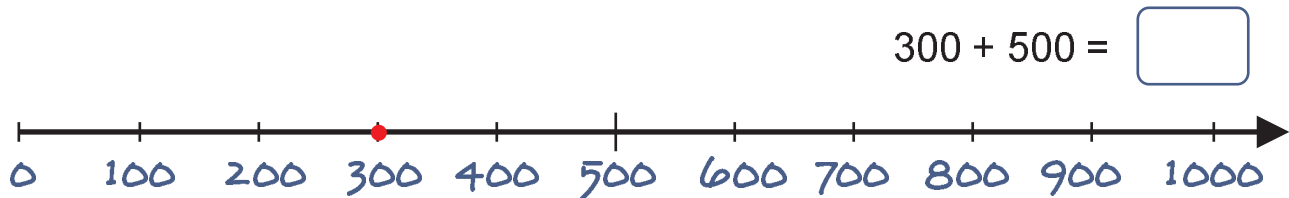
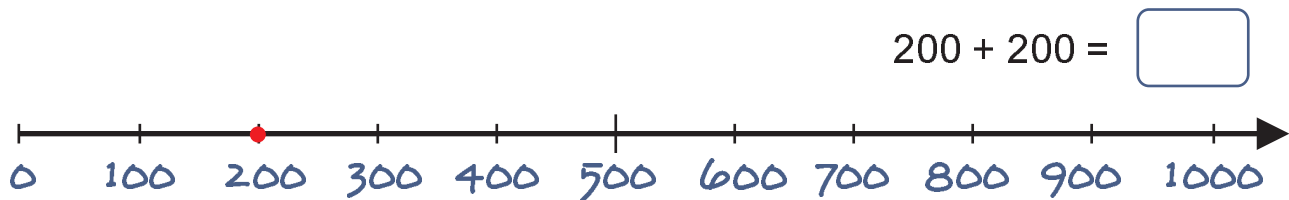
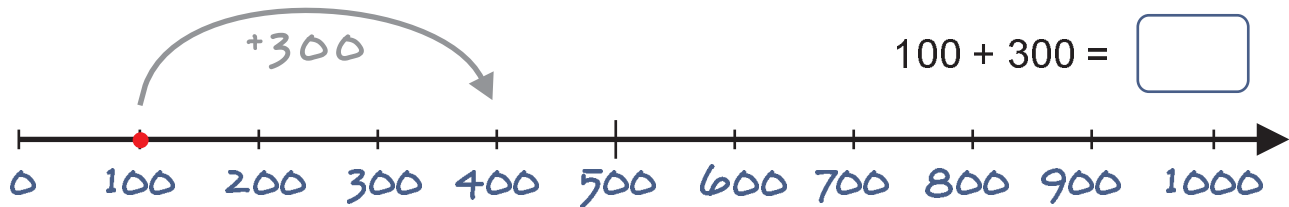


Addition mit Hunderterzahlen

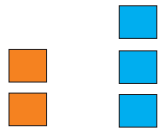
Addiere glatte Hunderterzahlen. Zeige die Aufgabe auf dem Zahlenstrahl.



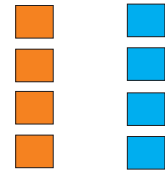


Addition mit Hunderterzahlen

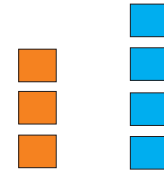
Berechne!



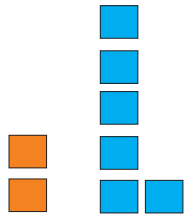
$$200 + 300 = \boxed{}$$



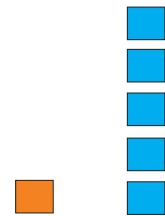
$$400 + 400 = \boxed{}$$



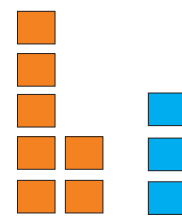
$$300 + 400 = \boxed{}$$



$$200 + 600 = \boxed{}$$



$$100 + 500 = \boxed{}$$



$$700 + 300 = \boxed{}$$

Setze die fehlenden Zahlen ein!

$$3H + 4H = \underline{300 + 400} = \boxed{700}$$

$$1H + 4H = \underline{} + \underline{} = \boxed{}$$

$$2H + 7H = \underline{} + \underline{} = \boxed{}$$

$$2H + 5H = \underline{} + \underline{} = \boxed{}$$

$$1H + 6H = \underline{} + \underline{} = \boxed{}$$

$$8H + 1H = \underline{} + \underline{} = \boxed{}$$

$$5H + 4H = \underline{} + \underline{} = \boxed{}$$

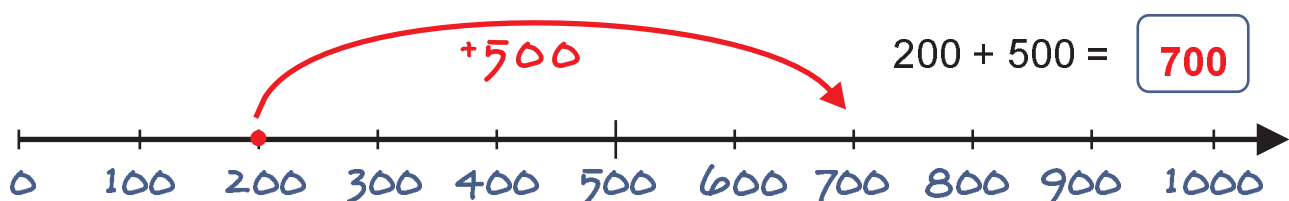
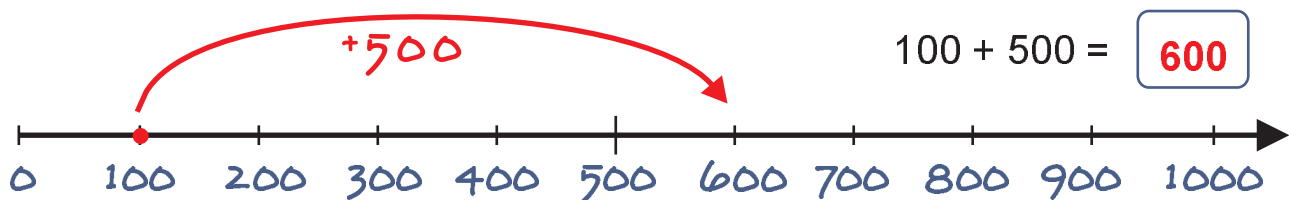
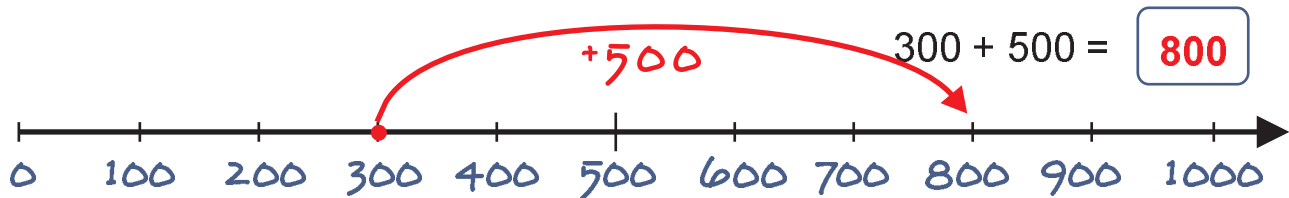
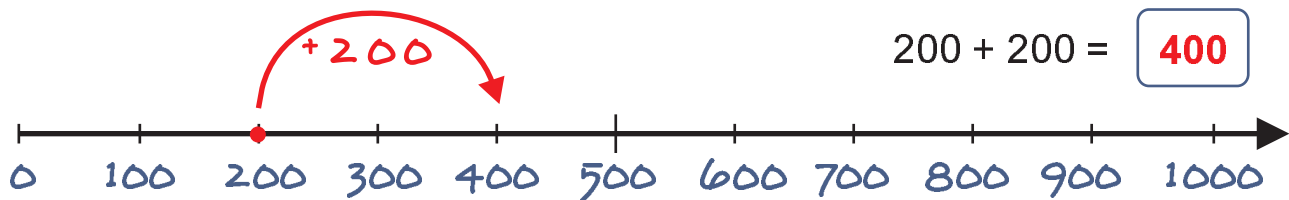
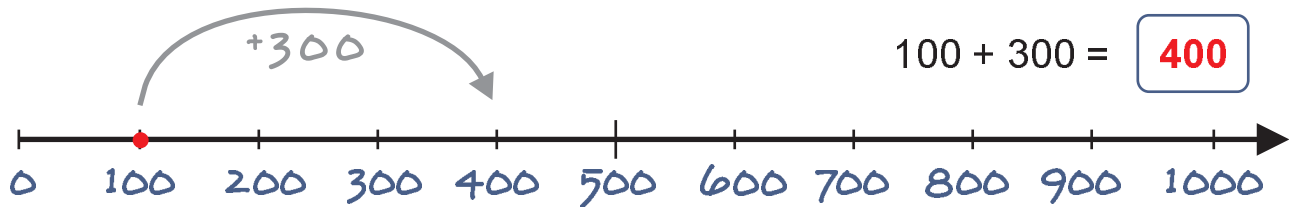
$$6H + 2H = \underline{} + \underline{} = \boxed{}$$

$$3H + 3H = \underline{} + \underline{} = \boxed{}$$

$$3H + 1H = \underline{} + \underline{} = \boxed{}$$

Addition mit Hunderterzahlen

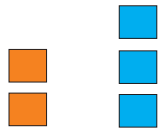
Addiere glatte Hunderterzahlen. Zeige die Aufgabe auf dem Zahlenstrahl.



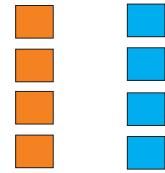


Addition mit Hunderterzahlen

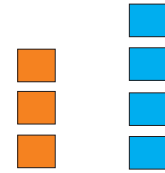
Berechne!



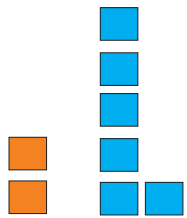
$$200 + 300 = 500$$



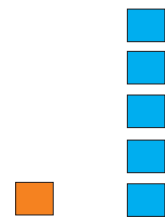
$$400 + 400 = 800$$



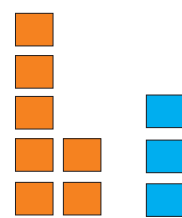
$$300 + 400 = 700$$



$$200 + 600 = 800$$



$$100 + 500 = 600$$



$$700 + 300 = 1000$$

Setze die fehlenden Zahlen ein!

$$3H + 4H = \underline{300 + 400} = 700$$

$$1H + 4H = \underline{100 + 400} = 500$$

$$2H + 7H = \underline{200 + 700} = 900$$

$$2H + 5H = \underline{200 + 500} = 700$$

$$1H + 6H = \underline{100 + 600} = 700$$

$$8H + 1H = \underline{800 + 100} = 900$$

$$5H + 4H = \underline{500 + 400} = 900$$

$$6H + 2H = \underline{600 + 200} = 800$$

$$3H + 3H = \underline{300 + 300} = 600$$

$$3H + 1H = \underline{300 + 100} = 400$$