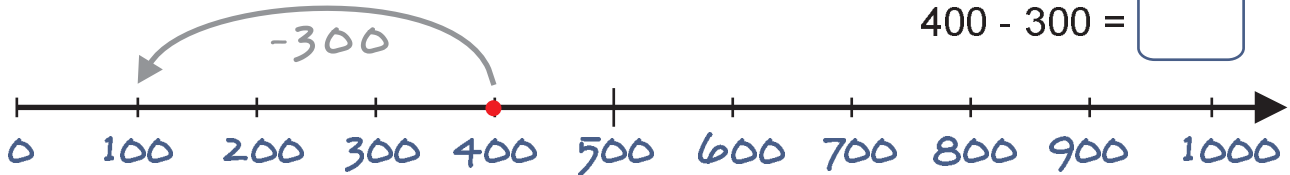


Subtraktion mit Hunderterzahlen



Berechne! Zeige die Aufgabe auf dem Zahlenstrahl.

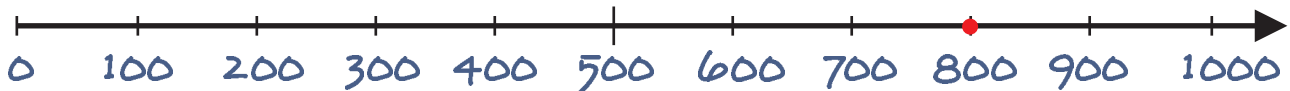
$$400 - 300 = \square$$



$$600 - 200 = \square$$



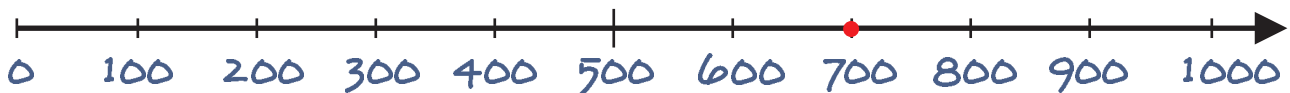
$$800 - 400 = \square$$



$$500 - 100 = \square$$



$$700 - 500 = \square$$



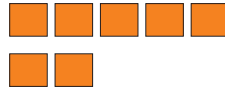
Subtraktion mit Hunderterzahlen



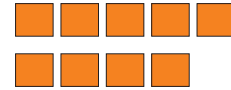
Berechne!



$500 - 200 = \boxed{}$



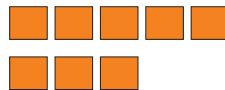
$700 - 400 = \boxed{}$



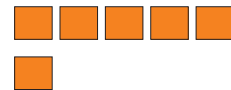
$900 - 500 = \boxed{}$



$300 - 100 = \boxed{}$



$800 - 200 = \boxed{}$



$600 - 500 = \boxed{}$

Setze die fehlenden Zahlen ein!

$8H - 3H = \boxed{5H}$

$9H - 5H = \boxed{}$

$6H - 4H = \boxed{}$

$800 - 300 = \boxed{500}$

$900 - 500 = \boxed{}$

$600 - 400 = \boxed{}$

$5H - 4H = \boxed{}$

$3H - 1H = \boxed{}$

$4H - 1H = \boxed{}$

$500 - 400 = \boxed{}$

$300 - 100 = \boxed{}$

$400 - 100 = \boxed{}$

$6H - 2H = \boxed{}$

$8H - 2H = \boxed{}$

$7H - 5H = \boxed{}$

$600 - 200 = \boxed{}$

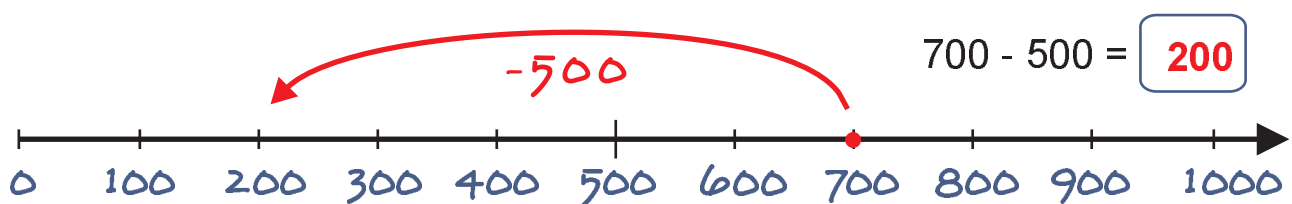
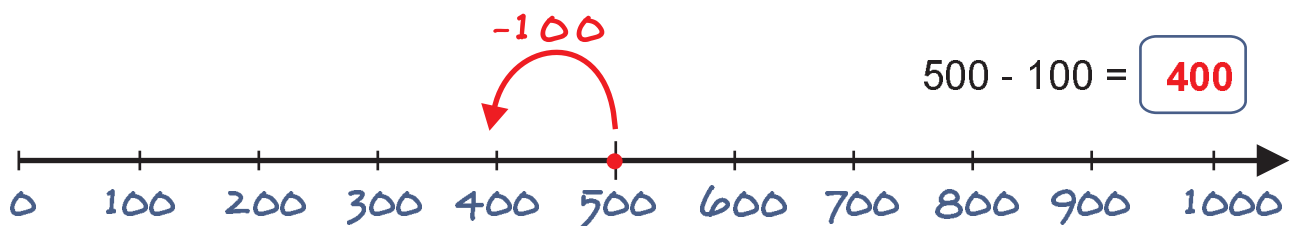
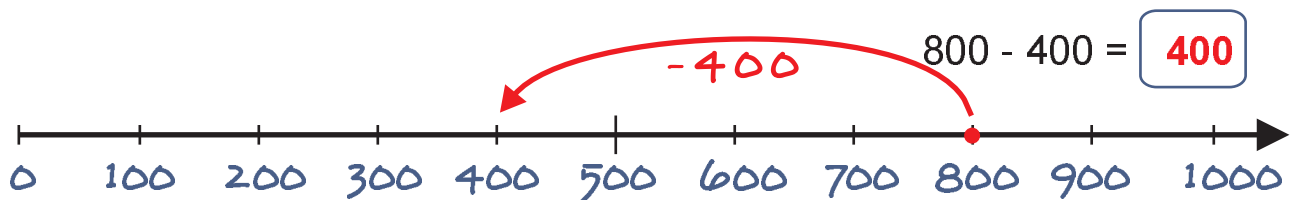
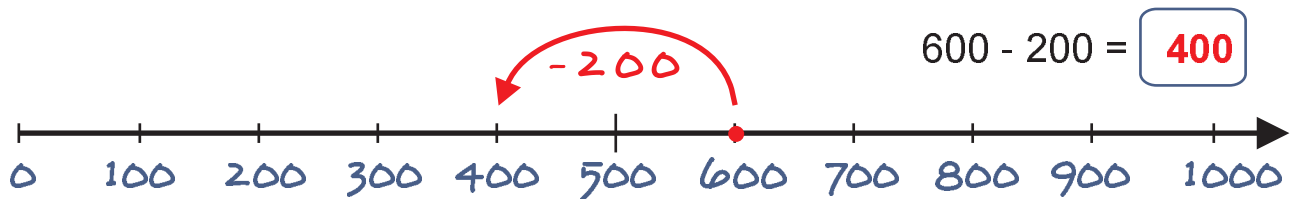
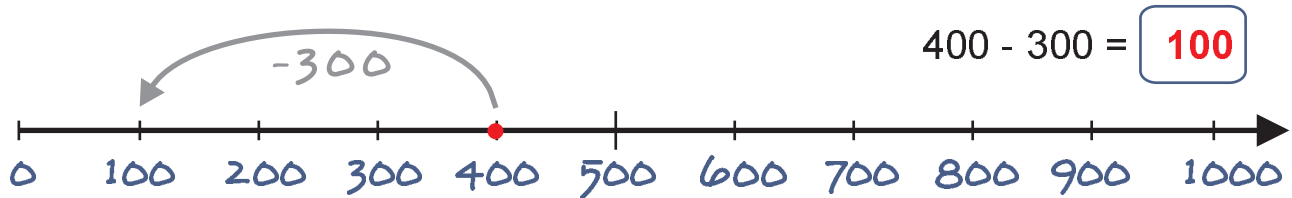
$800 - 200 = \boxed{}$

$700 - 500 = \boxed{}$

Subtraktion mit Hunderterzahlen



Berechne! Zeige die Aufgabe auf dem Zahlenstrahl.



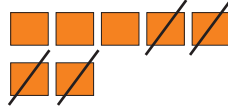
Subtraktion mit Hunderterzahlen



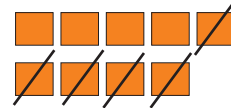
Berechne!



$$500 - 200 = \boxed{300}$$



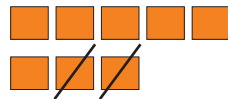
$$700 - 400 = \boxed{300}$$



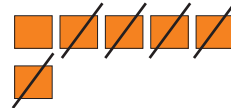
$$900 - 500 = \boxed{400}$$



$$300 - 100 = \boxed{200}$$



$$800 - 200 = \boxed{600}$$



$$600 - 500 = \boxed{100}$$

Setze die fehlenden Zahlen ein!

$$8H - 3H = \boxed{5H}$$

$$9H - 5H = \boxed{4H}$$

$$6H - 4H = \boxed{2H}$$

$$800 - 300 = \boxed{500}$$

$$900 - 500 = \boxed{400}$$

$$600 - 400 = \boxed{200}$$

$$5H - 4H = \boxed{1H}$$

$$3H - 1H = \boxed{2H}$$

$$4H - 1H = \boxed{3H}$$

$$500 - 400 = \boxed{100}$$

$$300 - 100 = \boxed{200}$$

$$400 - 100 = \boxed{300}$$

$$6H - 2H = \boxed{4H}$$

$$8H - 2H = \boxed{6H}$$

$$7H - 5H = \boxed{2H}$$

$$600 - 200 = \boxed{400}$$

$$800 - 200 = \boxed{600}$$

$$700 - 500 = \boxed{200}$$